

10. If the temperature increases by 9 degrees then it would be 22°C.



- A) True
- B) False

Level C

1. Counting on 15 from 35 is ...



- A) 20
- B) 35
- C) 50
- D) 65

2. Counting back 25 from 55 is ...



- A) 80
- B) 30
- C) 55
- D) 50

3. Counting on 19 from 35 is ...



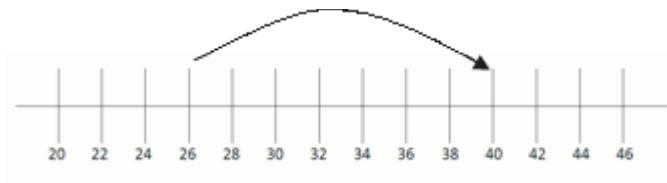
- A) 54
- B) 55
- C) 16
- D) 15

4. Counting back 26 from 65 is ...



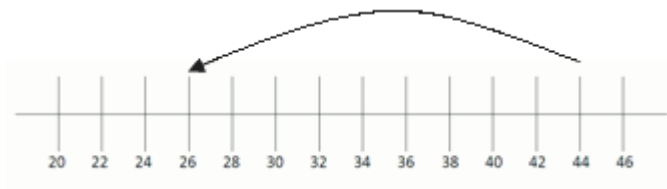
- A) 40
- B) 41
- C) 39
- D) 38

5. Which of the following problems does the number line show?




- A) $26 + 7$
- B) $26 + 14$
- C) $40 + 14$
- D) $40 - 7$

6. Which of the following problems does the number line show?



- A) $26 + 18$
- B) $26 - 9$
- C) $44 - 18$
- D) $44 + 9$

10. If the temperature decreases by 25 degrees then it would be -2°C .



- A) True
- B) False