
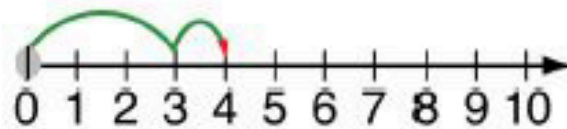
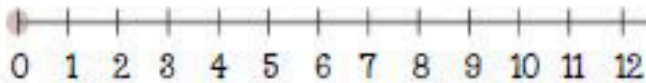
 Addition on a
Number Line 


$$3 + 1 = 4$$



$$6 + 4 = \underline{\hspace{2cm}}$$



$$2 + 7 = \underline{\hspace{2cm}}$$



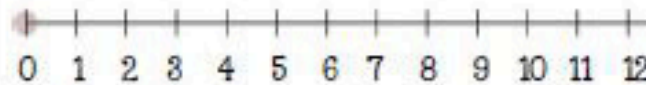
$$3 + 3 = \underline{\hspace{2cm}}$$



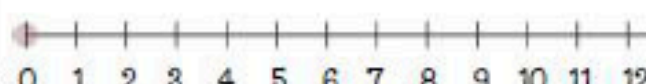
$$2 + 4 = \underline{\hspace{2cm}}$$



$$1 + 8 = \underline{\hspace{2cm}}$$



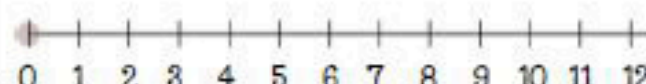
$$3 + 3 = \underline{\hspace{2cm}}$$



$$6 + 6 = \underline{\hspace{2cm}}$$



$$8 + 3 = \underline{\hspace{2cm}}$$



$$5 + 4 = \underline{\hspace{2cm}}$$

