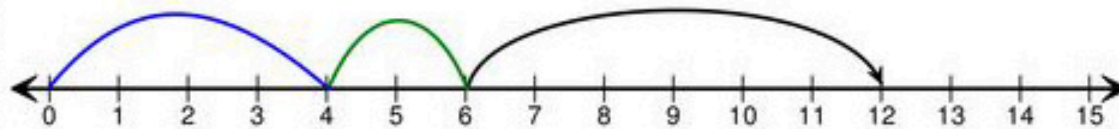


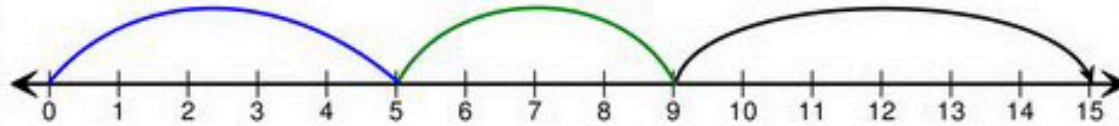
Using the figures, complete the addition sentence and find the sum.

1)



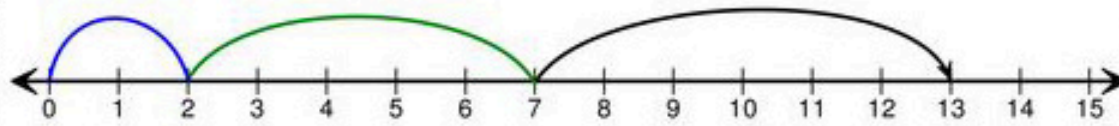
$$\boxed{} + \boxed{} + \boxed{} = \boxed{}$$

2)



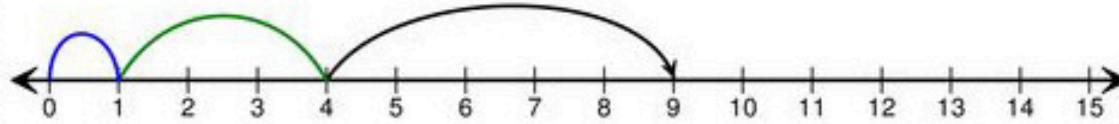
$$\boxed{} + \boxed{} + \boxed{} = \boxed{}$$

3)



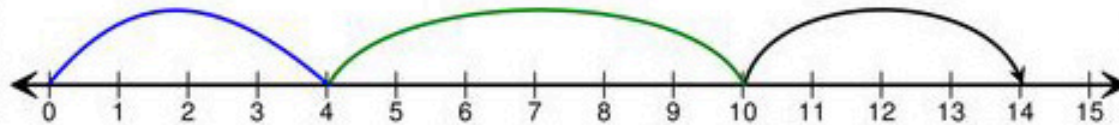
$$\boxed{} + \boxed{} + \boxed{} = \boxed{}$$

4)



$$\boxed{} + \boxed{} + \boxed{} = \boxed{}$$

5)



$$\boxed{} + \boxed{} + \boxed{} = \boxed{}$$