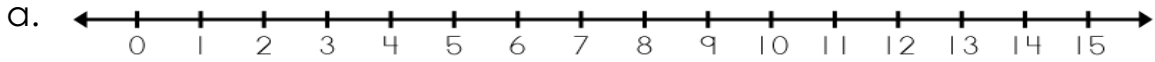


Name: \_\_\_\_\_

## Number Line Subtraction

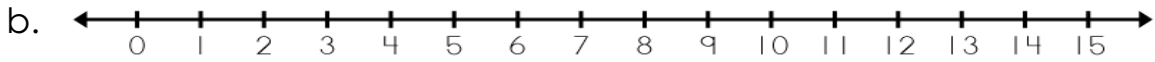


$12 - \underline{\quad} = 9$

I started at \_\_\_\_\_.

I counted back \_\_\_\_\_ spaces.

I stopped on \_\_\_\_\_.

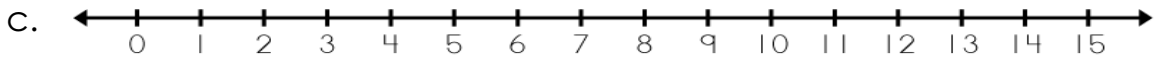


$8 - \underline{\quad} = 2$

I started at \_\_\_\_\_.

I counted back \_\_\_\_\_ spaces.

I stopped on \_\_\_\_\_.



$10 - \underline{\quad} = 3$

I started at \_\_\_\_\_.

I counted back \_\_\_\_\_ spaces.

I stopped on \_\_\_\_\_.