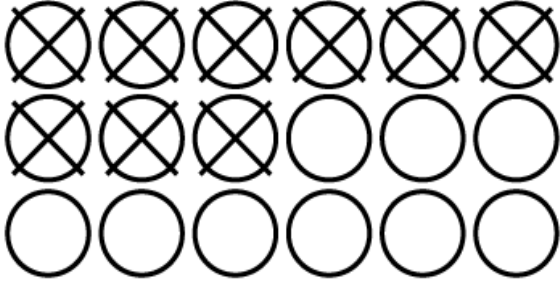


Name: \_\_\_\_\_

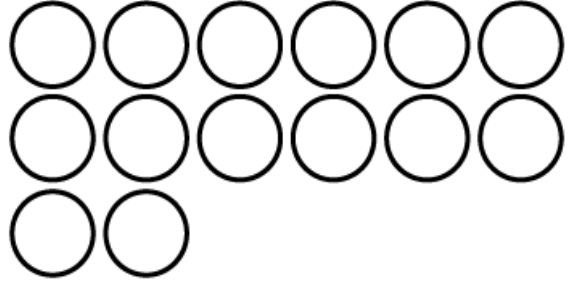


Cross off the counters to solve each.

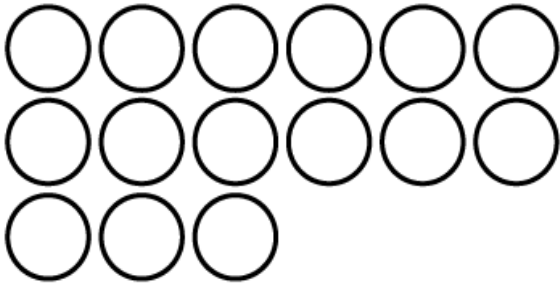
## Subtraction



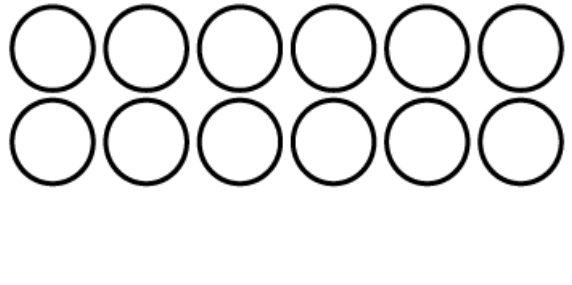
$$18 - 9 = \underline{\quad}$$



$$14 - 8 = \underline{\quad}$$



$$15 - 7 = \underline{\quad}$$



$$12 - 8 = \underline{\quad}$$

Draw counters to solve.

Draw counters to solve.

$$10 - 5 = \underline{\quad}$$

$$13 - 6 = \underline{\quad}$$