


Name: _____

Subtract




7 birds in a tree.
3 fly away.
How many left?

$$\underline{\quad} - \underline{\quad} = \underline{\quad}$$



6 dogs.
3 ran away.
How many left?

$$\underline{\quad} - \underline{\quad} = \underline{\quad}$$




9 fish.
2 swim away.
How many left?

$$\underline{\quad} - \underline{\quad} = \underline{\quad}$$




8 flies.
A frog eats 1.
How many left?

$$\underline{\quad} - \underline{\quad} = \underline{\quad}$$



5 baby birds in a nest.
2 jump out.
How many left?

$$\underline{\quad} - \underline{\quad} = \underline{\quad}$$



7 rabbits.
5 hop away.
How many left?

$$\underline{\quad} - \underline{\quad} = \underline{\quad}$$