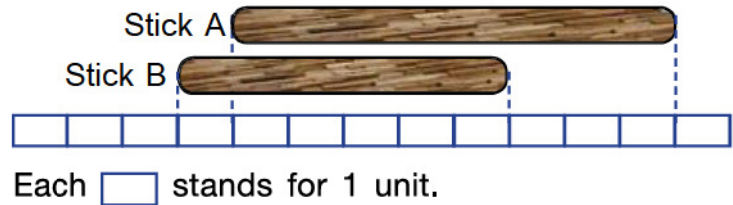


23. Priya baked 6 cakes. She baked 3 more cakes than Beena. Beena baked _____ cakes.

- A. 2 B. 4 C. 3 D. 6

24. Garima has two sticks A and B. Stick A is _____ units longer than stick B.

- A. 2
B. 4
C. 6
D. 8




25. Anna had 17 balls. She gave away 6 balls. How many balls are left with her?

- A. 11 B. 9 C. 8 D. 7

26. There are 12 horses. Three of them walk away. How many horses are left?


- A. 8
B. 9
C. 6
D. 5



27. Mini has 14 toys and Riya has 5 toys. How many total toys both have?

- A. 15 B. 19 C. 9 D. 20

28. Mohit needs to buy a chair and a lamp. How much does he need to pay?



- A. ₹ 15 B. ₹ 70 C. ₹ 22 D. ₹ 45

Space for Rough Work