






23. Sanchi has 8 apples and 2 mangoes. How many fruits does Sanchi has altogether?

- A. 8                                      B. 10                                      C. 12                                      D. 16


24. How many  are there in both the classes altogether?



- A. 35  
B. 42  
C. 44  
D. 62

Class 1A		Class 1B	
			
23	20	12	22

25. Pooja has 15 eggs. She puts them equally into 5 baskets. Each basket has \_\_\_\_ eggs.

- A. 5  
B. 3  
C. 9  
D. 12








26. Ritu has . Manha has .

How many ice-creams do they have altogether?

- A. 19                                      B. 18                                      C. 20                                      D. 22

27. Rinki has ₹ 20. What will she buy, if she spends all her money?

- A.       B.       C.       D. 

28. Varun has . He wants to distribute all toy cars in equal number to Amit and Meeku. How many toy cars each will have?

- A. 8                                      B. 4                                      C. 6                                      D. 3

SPACE FOR ROUGH WORK