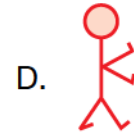

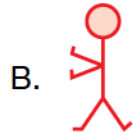



LOGICAL REASONING

1. Find the odd one out.





2. Count the number of triangles in the figure.

- A. 10
- B. 11
- C. 12
- D. 13

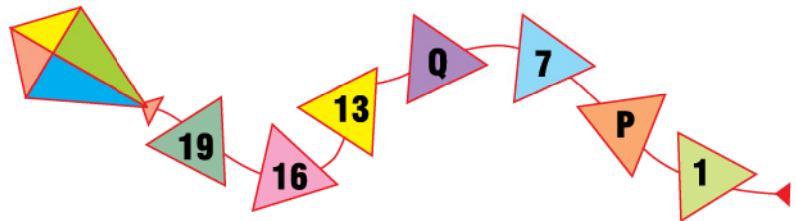


3. Which is the tallest?



4. Find the value of **P** and **Q** in the number pattern.

- A. 2, 8
- B. 3, 10
- C. 3, 8
- D. 4, 10



5. Which is the fifth letter from the right end in the given word?

S U N F L O W E R S

- A. O
- B. W
- C. F
- D. L

6. The watermelon is _____ apples in the given figure.

- A. Heavier than
- B. Lighter than
- C. As heavy as
- D. Can't be determined



SPACE FOR ROUGH WORK