



Q.1 Number of rectangles in the given figure is :



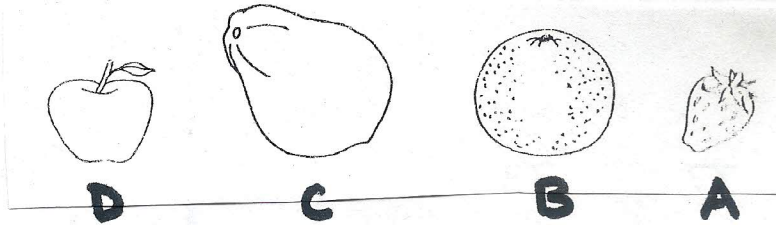
- a) 2 b) 1 c) 3 d) 4

Q.2 Which caterpillar is ~~at~~ the second position from the right?




- a) B b) C c) A d) D

Q.3 Look at the fruits and tell which is the heaviest?



- a) A b) B c) C d) D

Q.4 Which of the following rulers is the Longest?




- a) A b) C c) D d) B

Q.5 What are the missing numbers in the pattern:

89, 88, 87, _____, 85, _____, 83.

- a) 84 and 82 b) 84 and 87 c) 86 and 84
d) 84 and 83.

Q.6 What is the number of circles in the given figure ?



- a) 5 b) 6 c) 3 d) 4

Q.7 Number Y is 4 less than 100. What is Y?

- a) 94 b) 98 c) 96 d) 99

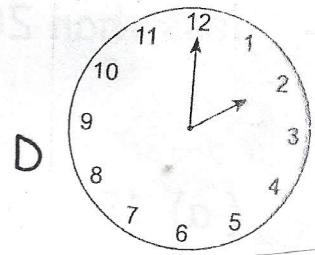
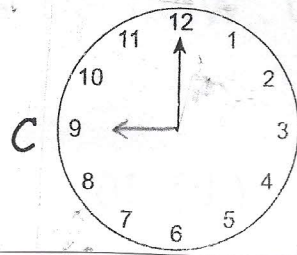
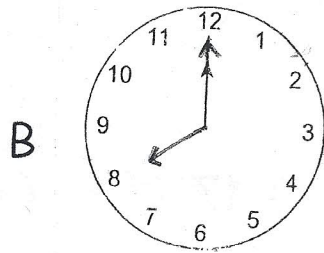
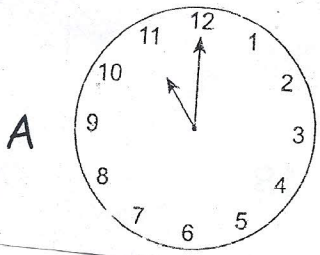
Q.8 Daksh is 8 years old now. What will be his age in 2018?

- a) 12 b) 10 c) 7 d) 11

Q.9 Mini's birthday comes in the month which has the least number of days. In which month does she celebrate her birthday?

- a) July b) August c) February d) May

Q.10 Monu reaches his home after school in the afternoon. Which clock shows the correct time he reaches home ?



a) D

b) C

c) B

d) A

Q.11 Rita brought 4 pairs of slippers. How many slippers were there altogether?

a) 8

b) 7

c) 4

d) 10

Q.12 Amit read the pages of a book from 7 to 12. How many pages did he read in all?

a) 6

b) 7

c) 5

d) 4

Q.13 Shape of a Five rupee coin is like that of a _____.

a) Square b) Rectangle c) Circle d) Triangle

Q.14 A farm has 8 cows , 10 hens and 7 goats .How many total animals are there on the farm ?

- a) 20 b) 21 c) 23 d) 25

Q.15 Which of the following is NOT correct:

- a) $28 = 28$ b) $19 > 17$ c) $34 < 33$ d) $40 > 30$

Q.16 Which of the following is correct:

- a) $4 + 4 = 8$ b) $10 - 2 = 7$ c) $30 + 3 = 32$
d) $44 - 4 = 39$

Q.17 In the word NOIDA , third letter from the Left is:

- a) D b) I c) A d) O

Q.18 Which number is Smaller than 100 but Greater than 98?

- a) 99 b) 97 c) 101 d) 92

Q.19 If today is Thursday , then the day after tomorrow will be _____.

- a) Sunday b) Wednesday c) Saturday
d) Friday

Q.20 Number formed with 3 Ones and 9 Tens is:

- a) 97 b) 92 c) 39 d) 93