



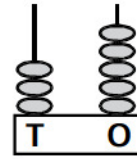



MENTAL ABILITY

1. Which flower number matches with given abacus?



2.



Which tree lies between trees B and D?

(A) Tree A

(B) Tree C

(C) Tree E

(D) Tree F

3. These are bowls of candy four friends have.

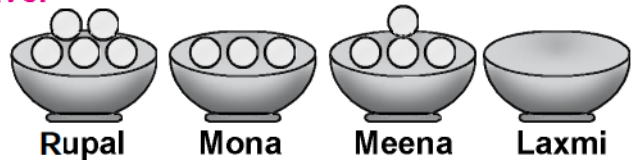
Who has zero candies ?

(A) Rupal

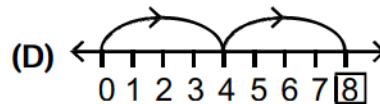
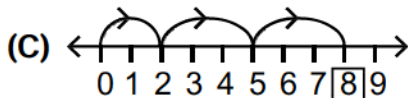
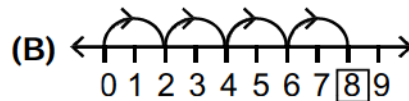
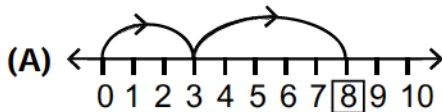
(B) Meena

(C) Laxmi

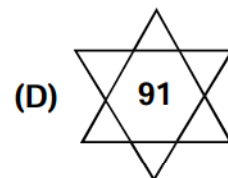
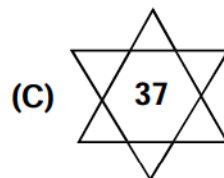
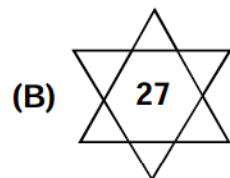
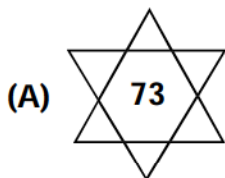
(D) Mona



4. Which number line shows $4 + 4$?



5. Which star shows greatest number ?



SPACE FOR ROUGH WORK