

22. Rice and wheat are which part of a plant?

- (A) Root                      (B) Leaf                      (C) Seed                      (D) Stem
- 

23. Which traffic signal makes you stop?

- (A) Green                      (B) Yellow                      (C) Red                      (D) Blue
- 





24. Which of these should be used carefully?

- (A)  Blade                      (B)  Knife                      (C)  Scissors                      (D) All of these
- 

25. We must not play on/in the \_\_\_\_\_.

- (A) Playground                      (B) Garden                      (C) Open space                      (D) Road
- 

26. Which body part is one in number?

- (A)                       (B)                       (C)                       (D) 
- 

27. Which part of the body helps you to enjoy a rainbow ?

- (A) Ears                      (B) Nose                      (C) Eyes                      (D) Hair
- 

28.  is filled with \_\_\_\_\_.

- (A) Sand                      (B) Water                      (C) Oil                      (D) Air
- 

29. Which part of the body is shown here?

- (A) Fingers                      (B) Eyes  
(C) Head                      (D) Legs



SPACE FOR ROUGH WORK