

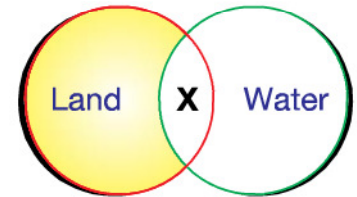
12. What is common between the plants whose products 'a' and 'b' are shown in the figure?

- A. They have thin woody stems which grow near the ground.
- B. They grow along the ground.
- C. They need support to grow.
- D. They grow in water.



13. The given figure shows places where animals live. Which of these animals can live in the place marked 'X'?


- A. Frog and Squirrel
- B. Monkey and Penguin
- C. Ostrich and Parrot
- D. Crocodile and Hippopotamus



14. Select the correct option regarding the given conversation.


- A. Amit is correct and Shashank is incorrect.
- B. Amit is incorrect and Shashank is correct.
- C. Both Amit and Shashank are correct.
- D. Both Amit and Shashank are incorrect.

I found an animal having six legs and wings.



Amit

You must have found a flea.



Shashank

15. A cup of tea is prepared from the given ingredients:  
Which of these ingredients do we get from plants?

Water, Tea, Sugar, Milk, Cardamon

- A. Water, Milk and Cardamon
- B. Sugar and Milk
- C. Water, Tea and Milk
- D. Tea, Sugar and Cardamon.

16. The given figures show that \_\_\_\_\_.

- A. Our skin helps us to feel things
- B. Our hand helps us to hold things
- C. We cannot lift the pot with a single hand
- D. All things are light weight except gift bag.



17. Select the odd one out.

- A. Rose
- B. Grapevine
- C. Money plant
- D. Pea plant