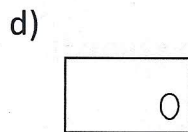
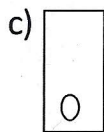
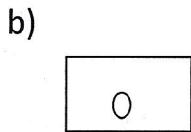

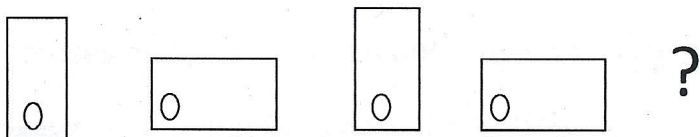


CLASS – I

1. Which one of the following options will continue the given series?



2. Which number will complete the pattern?

5 10 15 20 25 _____

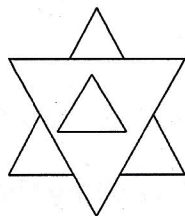
a) 35

b) 30

c) 32

d) 26

3. How many triangles are shown here?



a) 4

b) 5

c) 3

d) 6

4. A seed grows into a _____

a) butterfly

b) flower

c) plant

d) fruit

5. It is a herb and believed to be a holy plant . It is used to make medicine.

a) neem

b) tulsi

c) chilli

d) mint

6. If



is related to 6 then



is related to _____

a) 16

b) 5

c) 8

d) 12

7. Find the odd one out.

- a)lake b)pond c)river d)water

8. If today is Thursday , then day after tomorrow will be _____.

- a) Saturday b) Friday c) Sunday d) Monday

9. Houses made on wooden poles to keep them above the ground level and are constructed in areas where it rains heavily.

- a) igloos b) tents c) stilt houses d) house boats

10. Plants need water for _____.

- a) bathing b) drinking c) making food d)swimming

11. Unscramble the following to name the largest sense organ.

- a) gueont b) kins c) esye d) sone

12. Which of the following statement is correct regarding the safety rules on the road?

- a) Always walk on the footpath.
b) Keep ^{to} your left while walking on the road.
c) Cröss the road at the zebra crossing.
d) Do not follow traffic light rules.

13. The main source of water on the Earth is _____.

- a) well b) river c) rain d) sea

14. What does a plant need to grow?

- a) water b) air c) sunlight d) all of these

15. Name the vehicle which is used to travel in space.

- a) helicopter b) aeroplane c) jet plane d) rocket