

(NSTSE'10)

- a) 119                      b) 207                      c) 115                      d) 127

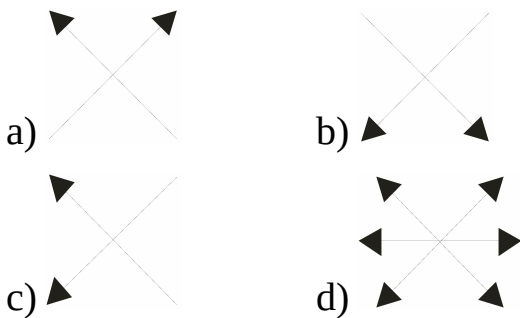
184. Find the missing number to complete the given number series.

1000, 998, 996, ..?.., 992, 990

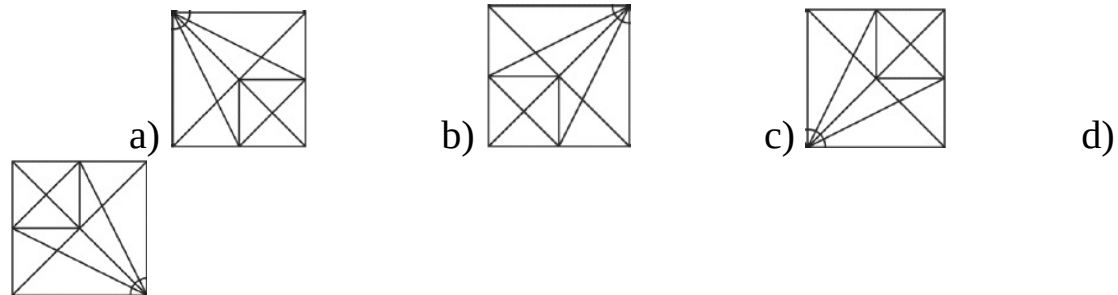
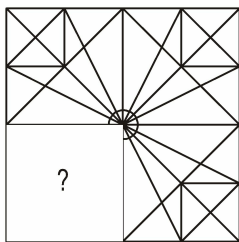
- a) 994                      b) 880                      c) 990                      d) 991

185. Choose the odd one out.

(iOM'15)



186. Which of the following option will complete the given figure?



187. Which of the following alphabet is hidden in the given figure?