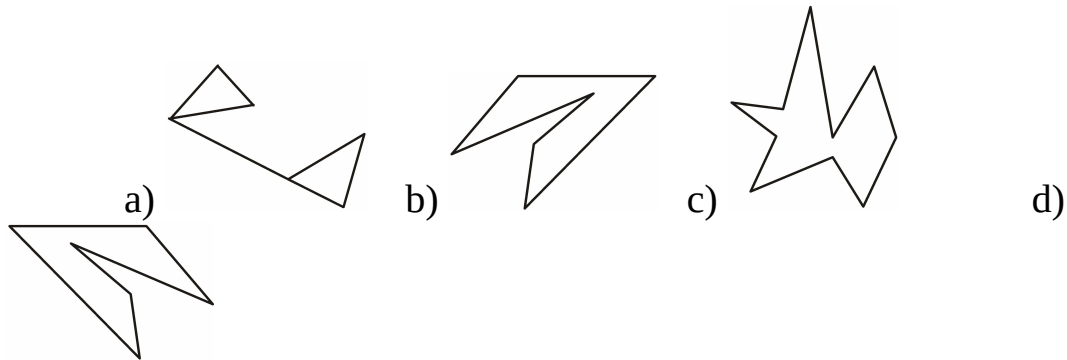
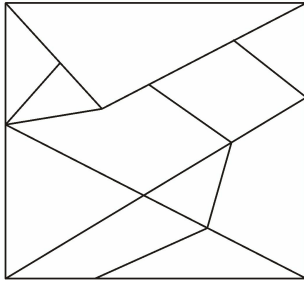



225. Select the figure from the options which is exactly embedded in the given figure.



226. Look at the numbers in this box.

(NSTSE'14)



Which of the following is true of the given numbers?

- a) They are all greater than 500. and 1000.
- b) They are all between 100 and 950.
- c) They are all less than 900.
- d) They are all less than 950.

227. Find the meaningful combination of numbers so that letters can be arranged accordingly to form a meaningful word.

E A R N O C T I

1 3 5 7 9 11 13 15

- a) 11 5 1 3 13 15 9 7
- b) 1 3 5 7 9 11 13 15
- c) 15 13 11 9 7 5 3 1
- d) 7 9 15 13 3 1 5 11

228. In a row of 40 students, Harshan is sixth from the left end and Swathi is sixth from the right end. How many students are between Harshan and Swathi?

- a) 29
- b) 28
- c) 21
- d) 25