





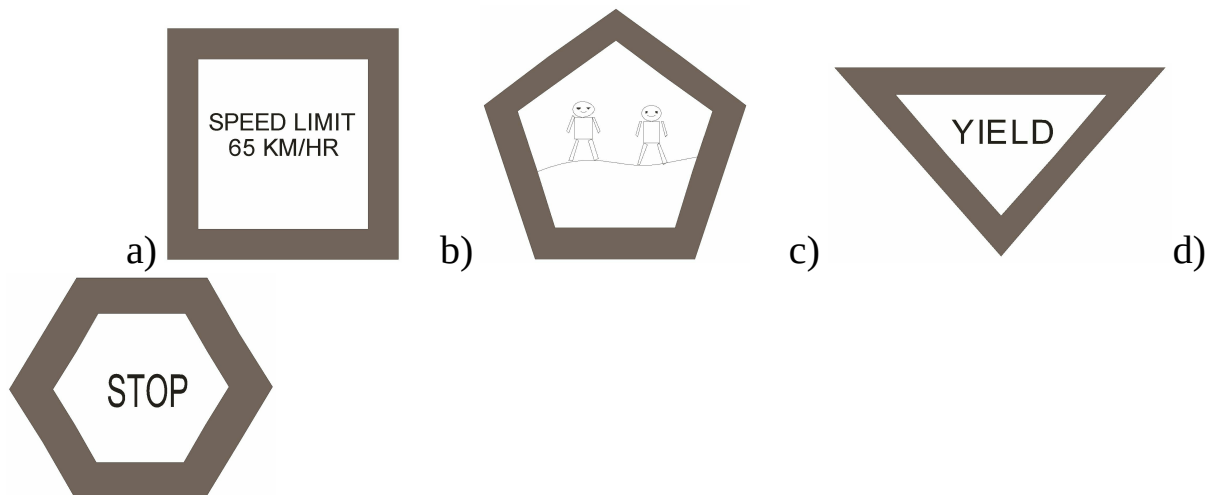
103.  +  +  +  = ?

a)  $2\frac{1}{4}$       b)  $2\frac{2}{4}$       c)  $3\frac{1}{4}$       d)  $3\frac{2}{4}$

104. Tania obtained a number by subtracting 2596 from 5964. Which one of the following digits is at the hundreds place in the number obtained by Tania?

a) 5      b) 3      c) 6      d) 8

105. Which of the following figures is shaped like a hexagon? (iOM'16)



106. 15 water bottles cost Rs.585. Find the cost of 1 water bottle.

a) 39      b) 38      c) 35      d) 30

107. The following pictograph shows the number of ice creams sold at a bakery in a week.  
On which day were the maximum numbers of ice creams were sold?